


Student Name _____

Date _____

Shape True/False

(1) One statement below is false. Find the false statement.

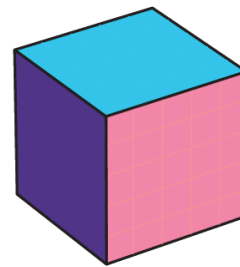

a.



A square can be created using triangles like this one.

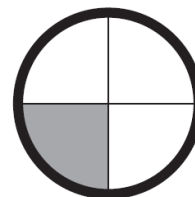
b.

None of these are squares.



c.

The shaded part of the circle is one fourth of the whole circle.



(2) How did you decide? Tell a classmate.